



1. Addition:-

a.  $2 + 7 = \square$

b.  $3 + 9 = \square$

c.  $8 + 5 = \square$

d.  $7 + 4 = \square$

e.  $6 + 7 = \square$

f.  $9 + 2 + 4 = \square$

g.  $3 + 5 + 2 = \square$

h.  $5 + 4 + 5 = \square$

i.  $4 + 3 + 2 = \square$

j.  $5 + 6 + 0 = \square$

2. Fill in the blanks: -

a.  $8 + 6 = \square$

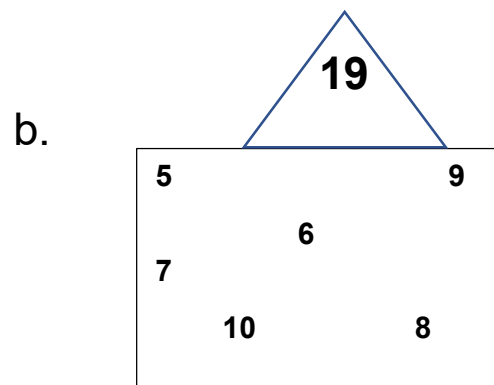
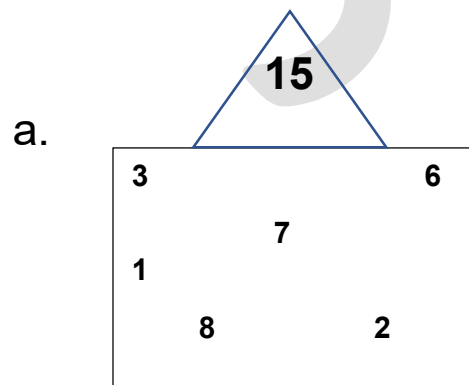
b.  $\square + 3 = 12$

c.  $\square + 0 = 15$

d.  $80 + \square = 81$

e.  $\square + 9 = 59$

3. The sum of two numbers in each box is equal to the number on the top of that box. Encircle those numbers:



4. Fill in the blanks: -

a. 2 Tens + 5 Ones =

b. 3 Tens + 2 Ones =

c. 4 Tens + 0 Ones =

d.  Tens + 2 Ones = 32

e. 5 Tens +  Ones = 56

5. Fill in the boxes: -

a. 12 =  Tens +  Ones

b. 21 =  Tens +  Ones

c. 32 =  Tens +  Ones

6. Find the Sum: -

	T	U
a.	1	2
	2	4
+		3
<hr/>		

	T	U
b.	6	1
	2	7
+	1	0
<hr/>		

7. Fill in the Box: -

$$\begin{array}{r} \text{a. } 3 \text{ tens} + 2 \text{ ones} \\ + 2 \text{ tens} + 4 \text{ ones} \end{array}$$

---

$$\square \text{ tens} + \square \text{ ones}$$

$$\begin{array}{r} \text{b. } 5 \text{ tens} + 4 \text{ ones} \\ + 3 \text{ tens} + 3 \text{ ones} \end{array}$$

---

$$\square \text{ tens} + \square \text{ ones}$$

8. Fill in the Box: -

$$\begin{array}{r} \text{a. } 7 \text{ tens} + 4 \text{ ones} \\ + 1 \text{ ten} + 8 \text{ ones} \end{array}$$

---

$$\square \text{ tens} + \square \text{ ones}$$

$$\begin{array}{r} \text{b. } 6 \text{ tens} + 9 \text{ ones} \\ + 2 \text{ tens} + 8 \text{ ones} \end{array}$$

---

$$\square \text{ tens} + \square \text{ ones}$$

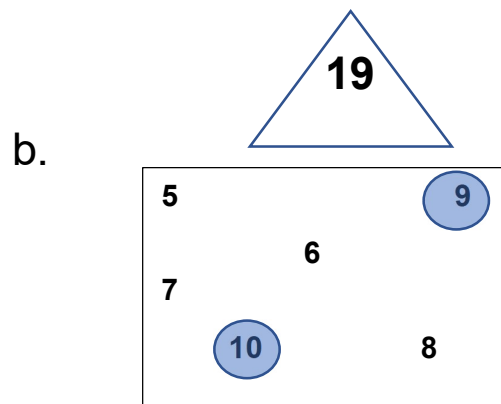
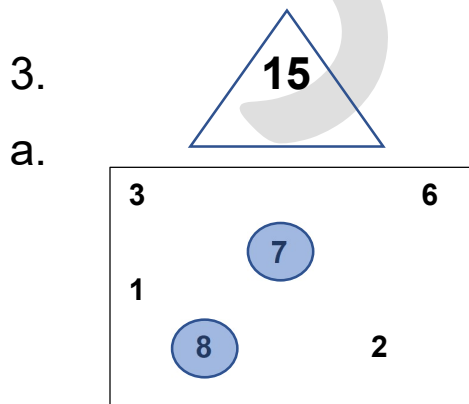
\*\* Practice at home: - (In the book)

Page: - 45, 46, 47, 48, 50, 54(1-4, 10,11), 62,63,65

## Answers

1. a.  f.   
b.  g.   
c.  h.   
d.  i.   
e.  j.

2. a.   
b.   
c.   
d.   
e.



4. a. 2 Tens + 5 Ones = 25

b. 3 Tens + 2 Ones = 32

c. 4 Tens + 0 Ones = 40

d. 3 Tens + 2 Ones = 32

e. 5 Tens + 6 Ones = 56

5. a. 12 = 1 Tens + 2 Ones

b. 21 = 2 Tens + 1 Ones

c. 32 = 3 Tens + 2 Ones

6. Find the Sum: -

	T	U
a.	1	2
	2	4
	+	3
	<hr/>	
	3	9

	T	U
b.	6	1
	2	7
	+	0
	<hr/>	
	9	8

7. Fill in the Box: -

$$\begin{array}{r} \text{a. } 3 \text{ tens} + 2 \text{ ones} \\ + 2 \text{ tens} + 4 \text{ ones} \end{array}$$

---

$$\boxed{5} \text{ tens} + \boxed{6} \text{ ones} = \boxed{56}$$

$$\begin{array}{r} \text{b. } 5 \text{ tens} + 4 \text{ ones} \\ + 3 \text{ tens} + 3 \text{ ones} \end{array}$$

---

$$\boxed{8} \text{ tens} + \boxed{7} \text{ ones} = \boxed{87}$$

8. Fill in the Box: -

$$\begin{array}{r} \text{a. } 7 \text{ tens} + 4 \text{ ones} \\ + 1 \text{ ten} + 8 \text{ ones} \end{array}$$

---

$$\boxed{8} \text{ tens} + \boxed{12} \text{ ones}$$

$$= \boxed{9} \text{ tens} + \boxed{2} \text{ ones} = \boxed{92}$$

$$\begin{array}{r} \text{b. } 6 \text{ tens} + 9 \text{ ones} \\ + 2 \text{ tens} + 8 \text{ ones} \end{array}$$

$$\boxed{8} \text{ tens} + \boxed{17} \text{ ones}$$

$$= \boxed{9} \text{ tens} + \boxed{7} \text{ ones} = \boxed{97}$$

বিঃদ্রঃ

- ছাত্র - ছাত্রীদের পাঠ যদি বুঝতে সমস্যা হয়, তবে নিজের বক্তব্য Comment Box-এ পাঠাও।
- নিজের নাম, শ্রেণি, বিভাগ, ক্রমিক সংখ্যা ও যোগাযোগ নম্বর উল্লেখ করবে।
- আমরা সরাসরি তোমাদের সাথে যোগাযোগ করে নেবো।